

Please check the examination details below before entering your candidate information

Candidate surname

Other names

**Pearson Edexcel
Functional Skills**

Centre Number

Candidate Number

Practice Set 2

Time: 25 minutes

Paper Reference **PRACL2/N02**

Mathematics

Level 2

Section A (Non – Calculator)



You must have:

Pen, HB pencil, eraser, ruler graduated in cm and mm, protractor, pair of compasses. Tracing paper may be used.

Total Marks

My signature confirms that I will not discuss the content of the test with anyone.

Signature: _____

Instructions

- Use **black** ink or ball-point pen.
- **Fill in the boxes** at the top of this page with your name, centre number and candidate number.
- Sign the declaration.
- Answer **all** questions.
- Write your final answers in the boxes provided.
- Answer the questions in the spaces provided – *there may be more space than you need.*
- You **must** show clearly how you get your answers in the spaces provided. Marks will be awarded for your working out.
- Check your working and answers at each stage.
- Diagrams are **not** accurately drawn, unless otherwise indicated.
- **Calculators may not be used.**
- Take the value of π to be 3.14

Information

- The total mark for this section is 16.
- The marks for **each** question are shown in brackets.
– *use this as a guide as to how much time to spend on each question.*
- This sign shows where marks will be awarded for showing your checks.

Advice

- Read each question carefully before you start to answer it.
- Check your answers if you have time at the end.

Turn over ►

S68214A

©2020 Pearson Education Ltd.

1/1/1




Pearson



DO NOT WRITE IN THIS AREA

DO NOT WRITE IN THIS AREA

DO NOT WRITE IN THIS AREA

DO NOT WRITE IN THIS AREA

DO NOT WRITE IN THIS AREA

DO NOT WRITE IN THIS AREA

BLANK PAGE



SECTION A

Answer ALL questions. Write your answers in the spaces provided.

1

(a) Work out $700 - 7^2$

(2)

Here is a list of numbers.

29 31 46 43 29 31 38 34 43 35 43

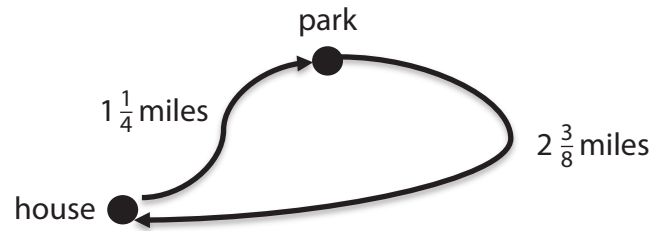
(b) Write down the mode of these numbers.

(1)

(Total for Question 1 is 3 marks)



- 2 Ola will run from her house to a local park and back to her house. She sees this sketch of the route she will take.



What is the total distance of the route Ola will run?
Give your answer as a mixed number.

You **must** show your working.

(3)

miles

(Total for Question 2 is 3 marks)

DO NOT WRITE IN THIS AREA

DO NOT WRITE IN THIS AREA

DO NOT WRITE IN THIS AREA

DO NOT WRITE IN THIS AREA

DO NOT WRITE IN THIS AREA

DO NOT WRITE IN THIS AREA



3 Saima is making a filling for a cake.

Saima mixes jam, sugar and soft cheese in the ratio 4 : 1 : 16

She uses 32 oz of soft cheese.

Saima knows that 1 oz is 28.3 grams.

(a) How many grams of jam does Saima need?

(3)

g



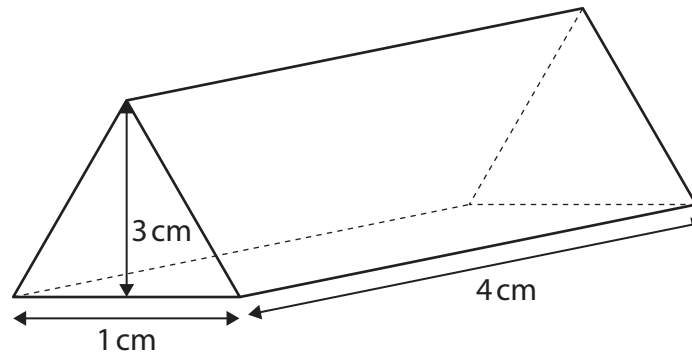
(b) Use estimation to show a check of your answer.

(1)

(Total for Question 3 is 4 marks)



- 4 Jack is a jeweller.
He makes a pendant in the shape of a triangular prism as shown in the diagram.



Jack makes the pendant from solid gold.

He uses this formula.

$$V = TL$$

where V = volume of a triangular prism (cm^3)
 T = area of the triangular face (cm^2)
 L = length of the prism (cm)

Jack knows that

- mass = density \times volume
- the density of gold is 19 grams per cm^3
- the cost of 1 gram of gold is £40

Jack sells the pendant for £382 more than the total cost of the gold needed to make the pendant.

How much does Jack sell the pendant for?

(6)

DO NOT WRITE IN THIS AREA

DO NOT WRITE IN THIS AREA

DO NOT WRITE IN THIS AREA

DO NOT WRITE IN THIS AREA

DO NOT WRITE IN THIS AREA

DO NOT WRITE IN THIS AREA



DO NOT WRITE IN THIS AREA

DO NOT WRITE IN THIS AREA

DO NOT WRITE IN THIS AREA

DO NOT WRITE IN THIS AREA

DO NOT WRITE IN THIS AREA

DO NOT WRITE IN THIS AREA

£

(Total for Question 4 is 6 marks)

TOTAL FOR SECTION A IS 16 MARKS



DO NOT WRITE IN THIS AREA

DO NOT WRITE IN THIS AREA

DO NOT WRITE IN THIS AREA

BLANK PAGE



Please check the examination details below before entering your candidate information

Candidate surname

Other names

**Pearson Edexcel
Functional Skills**

Centre Number

Candidate Number

Practice Set 2

Time: 1 hour 30 minutes

Paper Reference **PRACL2/C02**

Mathematics

Level 2

Section B (Calculator)



You must have:

Pen, calculator, HB pencil, eraser, ruler graduated in cm and mm, protractor, pair of compasses. Tracing paper may be used.

Total Marks

My signature confirms that I will not discuss the content of the test with anyone.

Signature: _____

Instructions

- Use **black** ink or ball-point pen.
- **Fill in the boxes** at the top of this page with your name, centre number and candidate number.
- Sign the declaration.
- Answer **all** questions.
- Write your final answers in the boxes provided.
- Answer the questions in the spaces provided – *there may be more space than you need.*
- You **must** show clearly how you get your answers in the spaces provided. Marks will be awarded for your working out.
- Check your working and answers at each stage.
- Diagrams are **not** accurately drawn, unless otherwise indicated.
- **Calculators may be used.**
- If your calculator does not have a π button take the value of π to be 3.14

Information

- The total mark for this section is 48.
- The total mark for this paper is 64.
- The marks for **each** question are shown in brackets.
– *use this as a guide as to how much time to spend on each question.*
- This sign shows where marks will be awarded for showing your checks.

Advice

- Read each question carefully before you start to answer it.
- Check your answers if you have time at the end.

Turn over ►

S68215A

©2020 Pearson Education Ltd.

1/1/1/1/1



S 6 8 2 1 5 A 0 1 2 0



Pearson

SECTION B

Answer ALL questions. Write your answers in the spaces provided.

- 1** Luke plays a computer game where he manages a city.
He buys two buildings.

Luke receives

- 135 coins every 8 hours from building A
- 36 coins every 15 minutes from building B.

Luke thinks he receives a total of 4000 coins in 24 hours from these buildings.

Is Luke correct?
Show why you think this.

(3)

(Total for Question 1 is 3 marks)

DO NOT WRITE IN THIS AREA

DO NOT WRITE IN THIS AREA

DO NOT WRITE IN THIS AREA

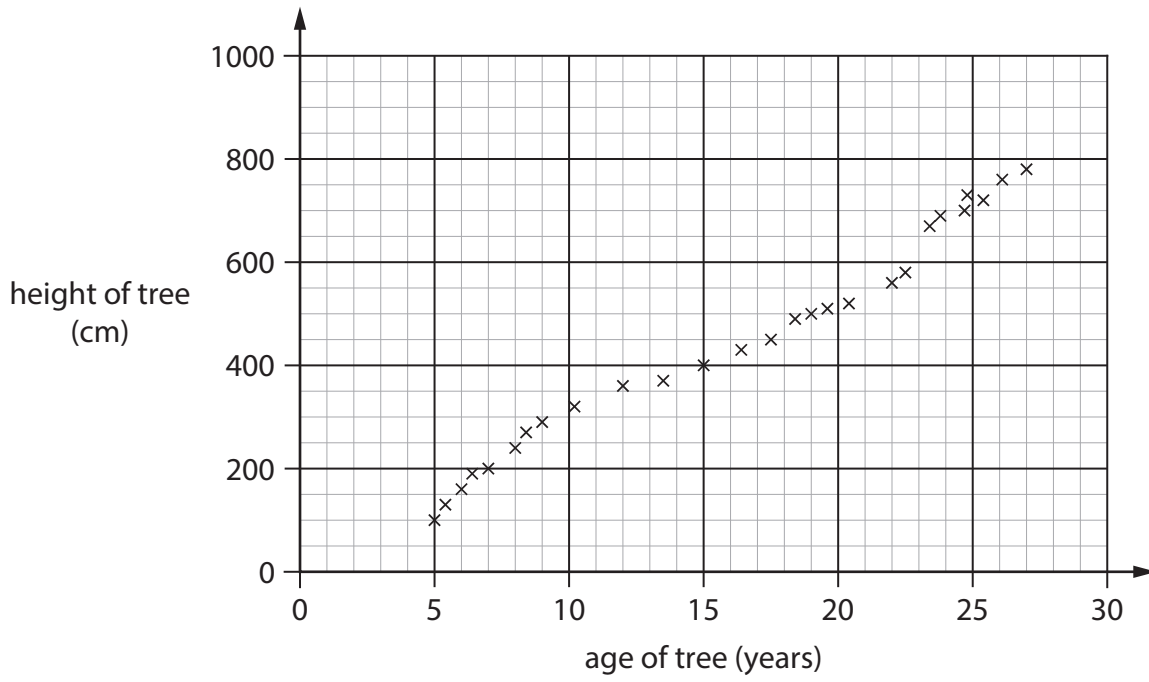
DO NOT WRITE IN THIS AREA

DO NOT WRITE IN THIS AREA

DO NOT WRITE IN THIS AREA



2 The scatter diagram shows information about the age and height of some trees.



(a) Describe the relationship shown in the diagram.

(1)

(b) Draw a line of best fit on the diagram.

(1)

(c) Estimate the age of a tree with a height of 625 cm.

(1)

years

(Total for Question 2 is 3 marks)



- 4 Sasha is the manager at a factory.
Last weekend 15 employees assembled 390 identical wardrobes.
Sasha wants 1200 of these wardrobes to be assembled next weekend.

How many employees does Sasha need next weekend?
You **must** show your working.

(3)

employees

(Total for Question 4 is 3 marks)



5 Vera is a shop manager.

She has this information about the income in her shop for eight weeks this year.

Week	1	2	3	4	5	6	7	8
Income (thousands of £)	53.5	42.3	39.8	45.1	52.4	19.4	47.9	42.5

The median income for the same eight weeks last year was £49 300

Vera knows that the median income for these eight weeks has decreased this year compared to last year.

(a) Work out the percentage decrease of the median income.

Give your answer to 2 decimal places.

(4)

DO NOT WRITE IN THIS AREA

DO NOT WRITE IN THIS AREA

DO NOT WRITE IN THIS AREA

DO NOT WRITE IN THIS AREA

DO NOT WRITE IN THIS AREA

DO NOT WRITE IN THIS AREA



DO NOT WRITE IN THIS AREA

DO NOT WRITE IN THIS AREA

DO NOT WRITE IN THIS AREA

DO NOT WRITE IN THIS AREA

DO NOT WRITE IN THIS AREA

DO NOT WRITE IN THIS AREA

%



(b) Show a check of your calculation for the median.

(1)

(Total for Question 5 is 5 marks)



- 6 Carlos invests £4500 for 3 years.
He receives compound interest of 1.5% per year.

Carlos thinks the total of the money he invests and the interest will be more than £4750 at the end of the 3 years.

Is he correct?
Show why you think this.

(3)

(Total for Question 6 is 3 marks)

DO NOT WRITE IN THIS AREA

DO NOT WRITE IN THIS AREA

DO NOT WRITE IN THIS AREA

DO NOT WRITE IN THIS AREA

DO NOT WRITE IN THIS AREA

DO NOT WRITE IN THIS AREA



7

(a) Write 21.9% as a decimal.

(1)

(b) Work out 37% of 4618.57
Give your answer to 1 decimal place.

(2)

(c) Write fifty-one million forty-nine thousand one hundred and twelve
in figures.

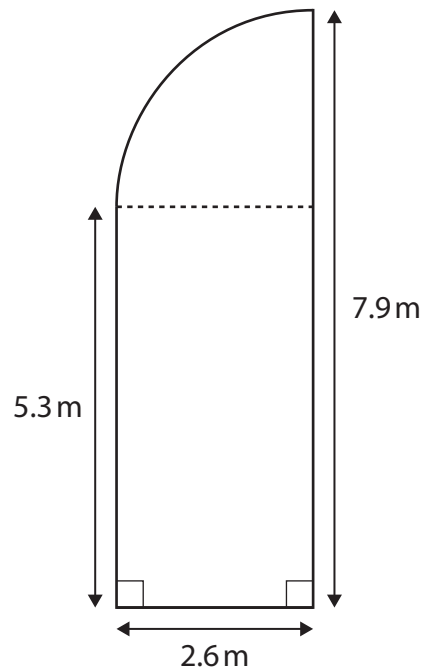
(1)

(Total for Question 7 is 4 marks)



8 Jessie needs to cover a wooden floor with varnish.

The floor is in the shape of a rectangle and a quarter circle.



A tin of varnish

- covers 6 m^2
- costs £5.41

Jessie has £25 to buy the tins of varnish she needs to cover this wooden floor.

Is £25 enough to buy all the tins of varnish Jessie needs?

(6)

DO NOT WRITE IN THIS AREA

DO NOT WRITE IN THIS AREA

DO NOT WRITE IN THIS AREA

DO NOT WRITE IN THIS AREA

DO NOT WRITE IN THIS AREA

DO NOT WRITE IN THIS AREA



DO NOT WRITE IN THIS AREA


DO NOT WRITE IN THIS AREA

DO NOT WRITE IN THIS AREA

DO NOT WRITE IN THIS AREA

DO NOT WRITE IN THIS AREA

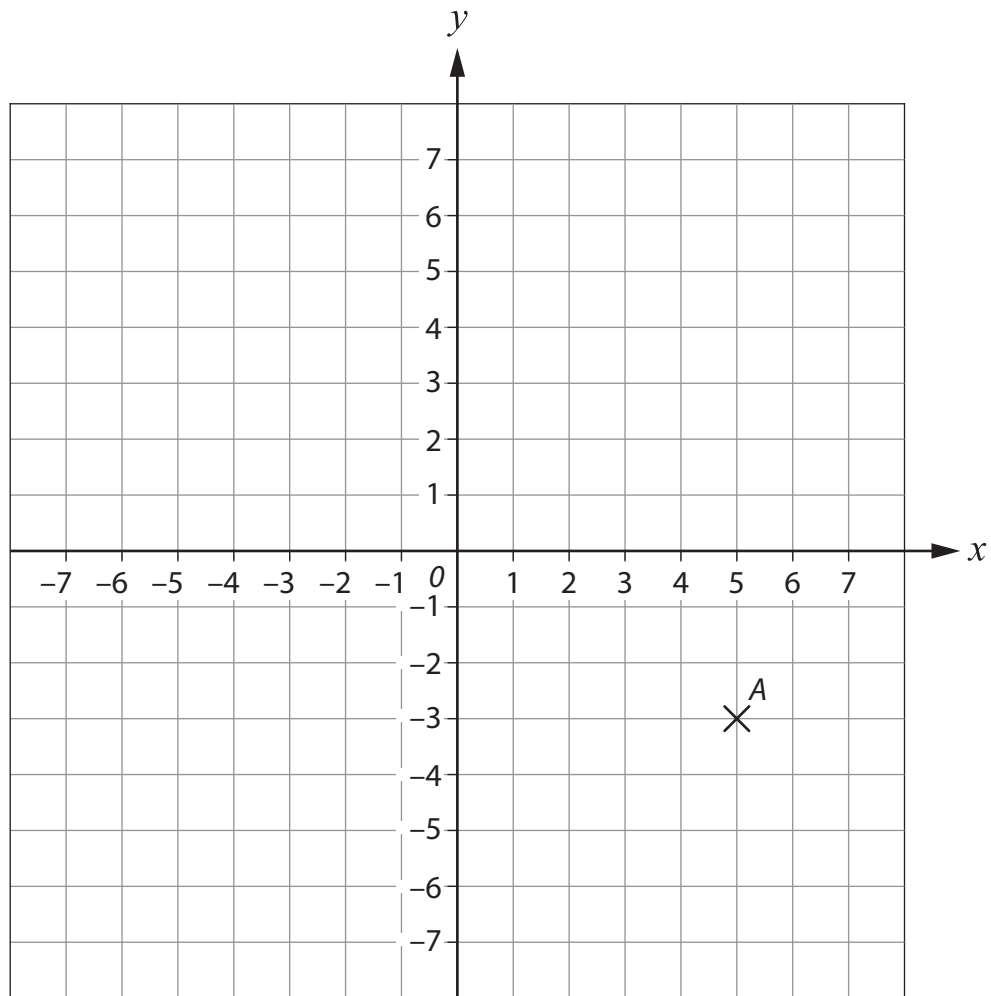
DO NOT WRITE IN THIS AREA



(Total for Question 8 is 6 marks)



9 Here is a coordinate grid.



(a) Write down the coordinates of point A.

(1)

(b) Plot point B with coordinates $(-4, 6)$ on the grid.
Remember to label your point.

(1)

(c) Plot a point C on the grid so that angle ACB is a right angle.
Remember to label your point.

(1)

(Total for Question 9 is 3 marks)



DO NOT WRITE IN THIS AREA

DO NOT WRITE IN THIS AREA

DO NOT WRITE IN THIS AREA

DO NOT WRITE IN THIS AREA

DO NOT WRITE IN THIS AREA

DO NOT WRITE IN THIS AREA

10 Kevin buys a second-hand car for £7346
He knows that the car is worth 27% less than when it was brand new.
Kevin thinks that the car cost more than £9000 when brand new.

Is Kevin correct?
Show why you think this.

(3)

(Total for Question 10 is 3 marks)



11 Emma is the recruitment manager in a large company.

She has this information about the number of workers in each of the 20 offices of the company.

number of workers	number of offices
1 to 20	9
21 to 40	8
41 to 60	2
61 to 80	1

Emma estimates the mean number of workers in an office as 30

- (a) Is Emma correct?
Show why you think this.

(3)

DO NOT WRITE IN THIS AREA

DO NOT WRITE IN THIS AREA

DO NOT WRITE IN THIS AREA

DO NOT WRITE IN THIS AREA

DO NOT WRITE IN THIS AREA

DO NOT WRITE IN THIS AREA



200 people apply to work at a new office.
49 of these people are employed.

(b) Work out 49 as a percentage of 200

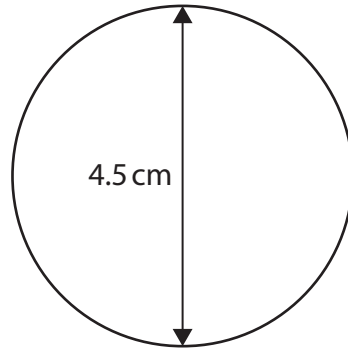
(2)

%

(Total for Question 11 is 5 marks)



12 Claire is a designer.
She needs to put some lights around a circular bandstand in a park.
Claire has this scale diagram of the plan view of the bandstand.



scale 1 : 200

Claire knows that

- a set of lights is 4.75 m in length
- each set of lights costs £27.99

(a) Work out the total cost for the sets of lights Claire needs.

(5)

£

DO NOT WRITE IN THIS AREA

DO NOT WRITE IN THIS AREA

DO NOT WRITE IN THIS AREA

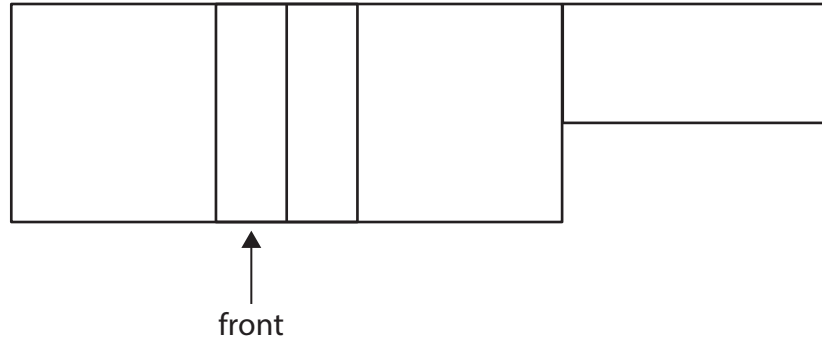
DO NOT WRITE IN THIS AREA

DO NOT WRITE IN THIS AREA

DO NOT WRITE IN THIS AREA



Here is a plan view of another building Claire designs.

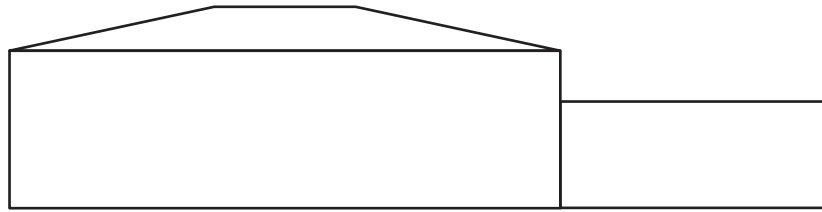


An apprentice draws the front elevation of this building.

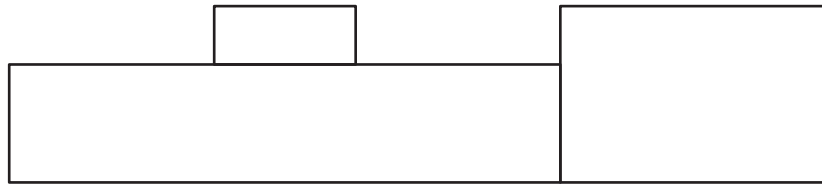
- (b) Which sketch below can be the front elevation for this building?
Tick (✓) the correct answer.

(1)

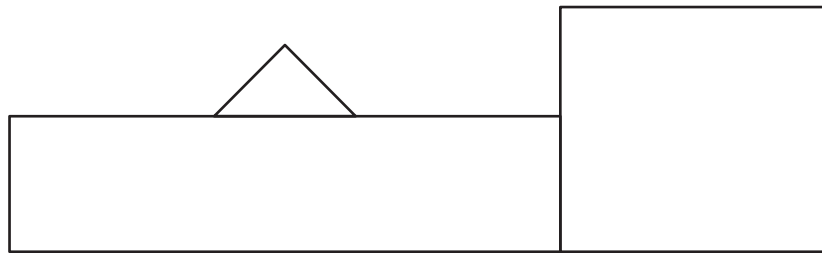
()



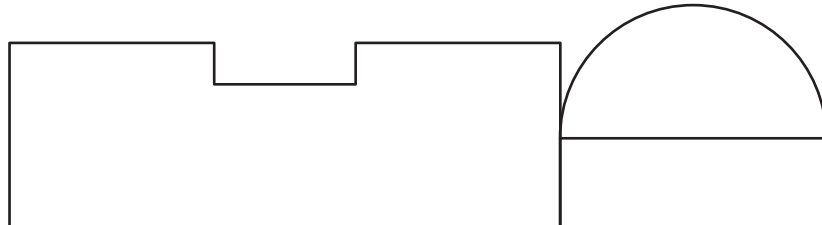
()



()



()



(Total for Question 12 is 6 marks)

TOTAL FOR SECTION B IS 48 MARKS
TOTAL FOR PAPER IS 64 MARKS





DO NOT WRITE IN THIS AREA

DO NOT WRITE IN THIS AREA

DO NOT WRITE IN THIS AREA

DO NOT WRITE IN THIS AREA

DO NOT WRITE IN THIS AREA

DO NOT WRITE IN THIS AREA

BLANK PAGE



DO NOT WRITE IN THIS AREA

DO NOT WRITE IN THIS AREA

DO NOT WRITE IN THIS AREA

DO NOT WRITE IN THIS AREA

DO NOT WRITE IN THIS AREA

DO NOT WRITE IN THIS AREA

BLANK PAGE



S 6 8 2 1 5 A 0 1 9 2 0

DO NOT WRITE IN THIS AREA

DO NOT WRITE IN THIS AREA

DO NOT WRITE IN THIS AREA

BLANK PAGE

